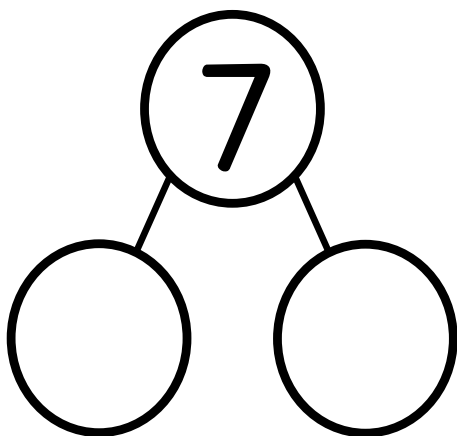
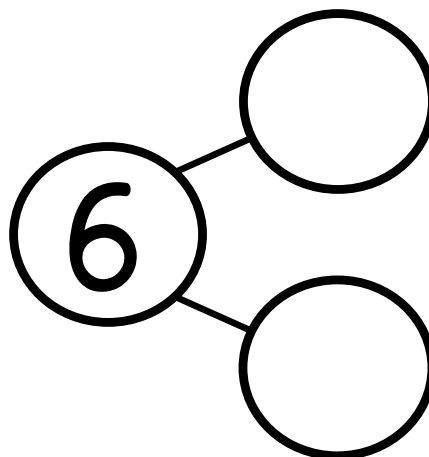


Name: \_\_\_\_\_

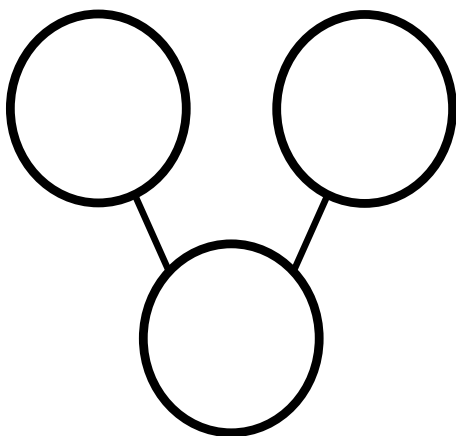
Draw a line to break each cube stick into 2 parts. Fill in each number bond and number sentence.



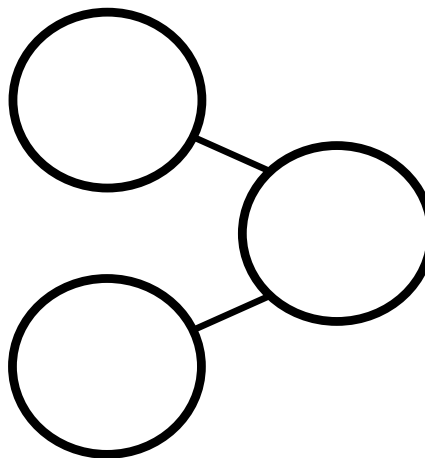
7 is  and



is  and



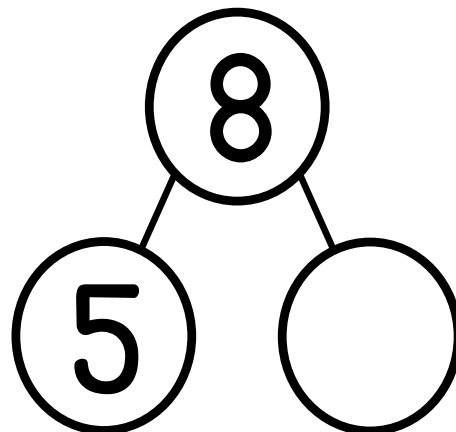
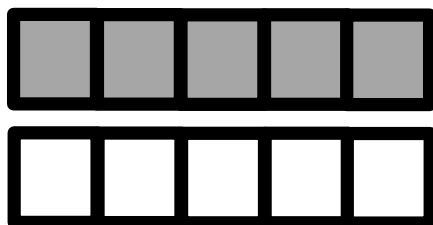
is  and



is  and

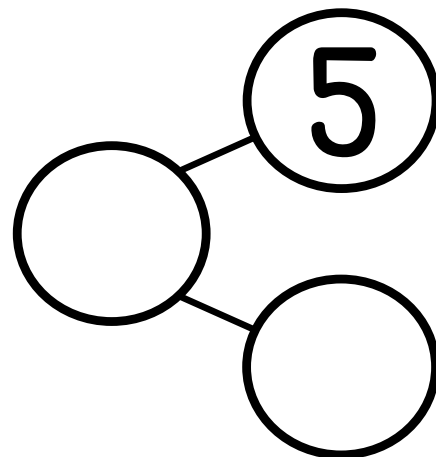
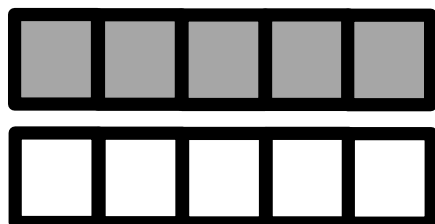
Name: \_\_\_\_\_

5 cubes are colored. Color 3 more cubes to make 8. Fill in the number bond.



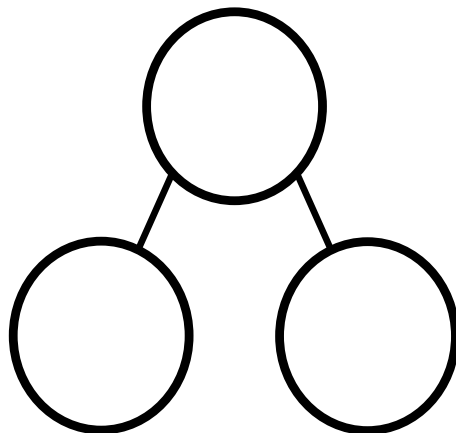
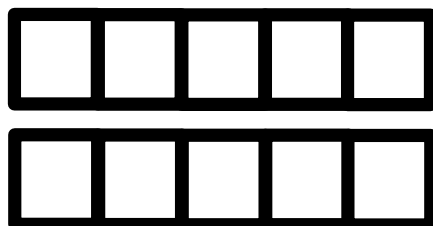
**5** and  more is **8**

5 cubes are colored. Color more boxes to make 6. Fill in the number bond.



**5** and  more is


Color 7 cubes. Fill in the number bond.



**5** and  more is

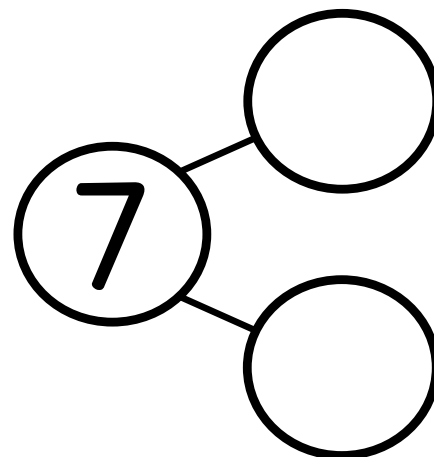
Name: \_\_\_\_\_

Draw more cubes to make 6. Complete the number bond.



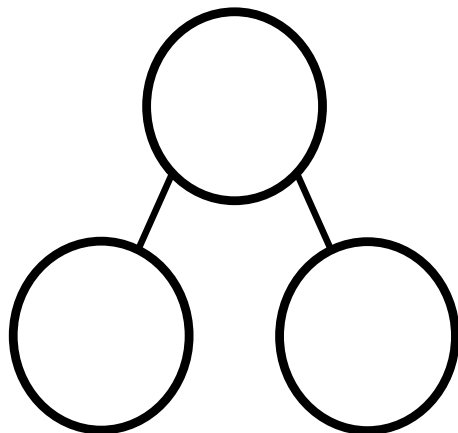
**5** and  more is **6**

Draw more cubes to make 7. Complete the number bond.



and  more is **7**



Draw more cubes to make 8. Complete the number bond.



and  more is **8**

Name: \_\_\_\_\_


Use the picture to fill in the number bond and math sentence.



There are 6 flowers.  
5 are in the first row.  
1 is in the second row.

$$\boxed{6} = \boxed{\phantom{00}} + \boxed{\phantom{00}}$$

Use the picture to fill in the math sentences.



$\boxed{\phantom{00}}$  is  $\boxed{\phantom{00}}$  and  $\boxed{\phantom{00}}$

$$\boxed{6} = \boxed{\phantom{00}} + \boxed{\phantom{00}}$$

There are 6 clouds.  
2 are big.  
4 are small.

Name: \_\_\_\_\_

There are 6 dogs. 2 have spots and 4 have no spots.



2

+

4

=



=

2

+

4



There are 3 pigs in the mud and 3 pigs in the grass. Draw a picture to go with the story. Fill in the number sentences.

+

=

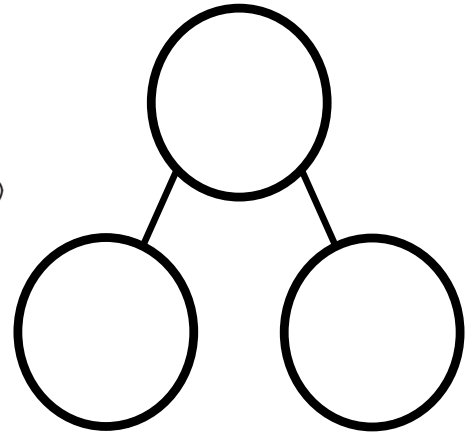

=

+

Create your own math story. Tell your story to a friend. Have your friend illustrate the story and create a number sentence to go with it.

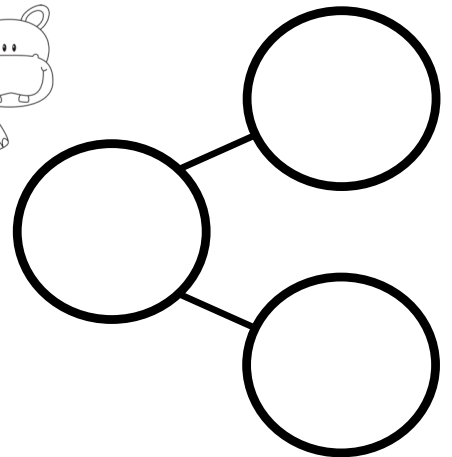
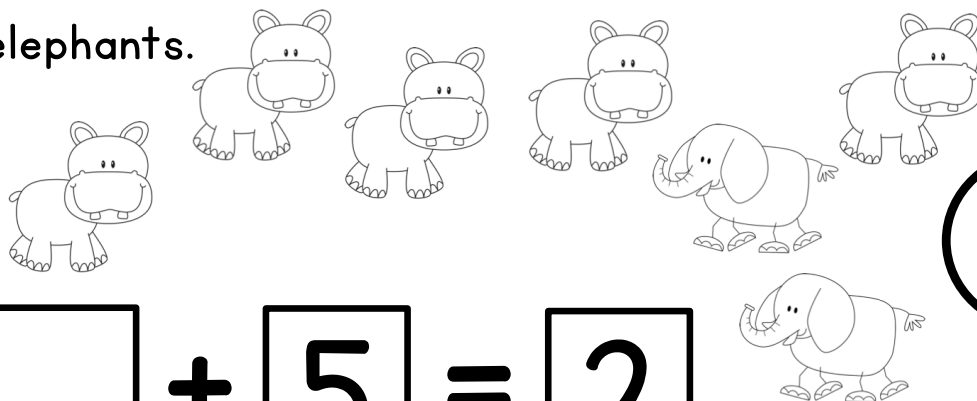
Name: \_\_\_\_\_

There are 7 animals. 6 monkeys and 1 giraffe.



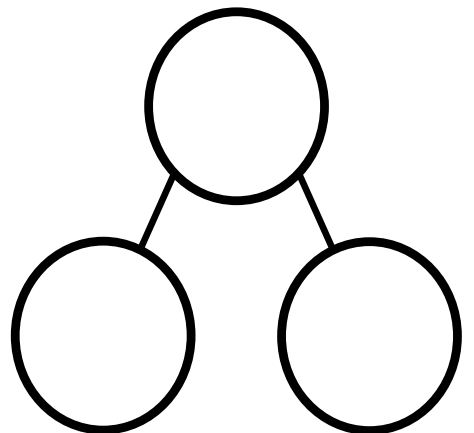
$$\square = 6 + \square$$

There are 7 animals at the zoo. There are 5 hippos and 2 elephants.



$$\square + 5 = \square$$

Use the pictures below to complete the number sentence and number bond.



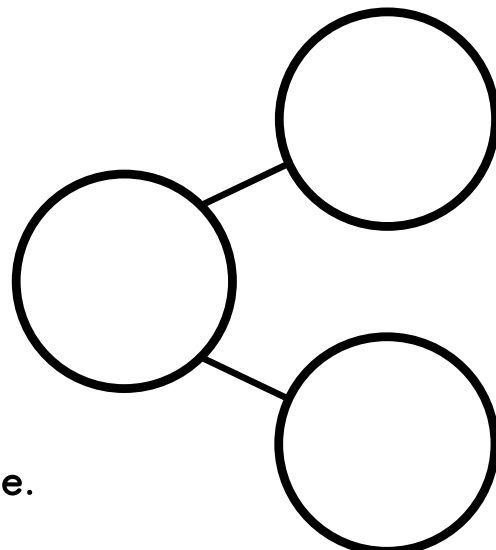
$$\square = \square + \square$$

Name: \_\_\_\_\_

5 gray cubes and 2 white cubes is 7.

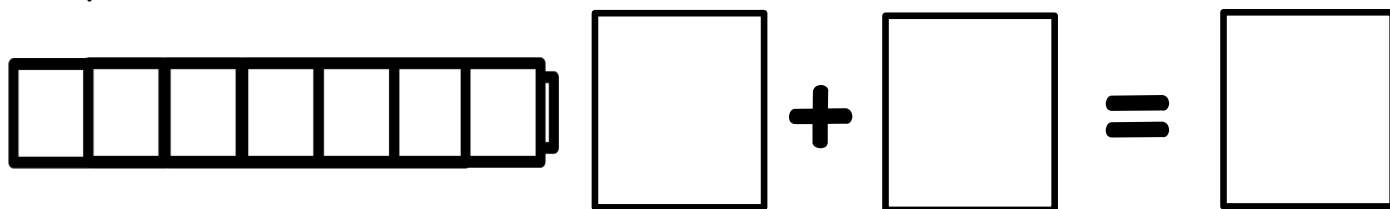


$$\boxed{5} + \boxed{2} = \boxed{\phantom{00}}$$



Color the cubes to match the cubes above.

Complete the number sentence.




Create your own math story. Tell a friend. Have your friend illustrate your story and create a math sentence to match.

Name: \_\_\_\_\_


Complete each number sentence.

There are 8 fish. There are 5 jellyfish and 3 goldfish.




$$\begin{array}{r} \square \\ \square \end{array} = \square + \square$$
$$\begin{array}{r} \square \\ \square \end{array} + \square = \square$$

There are 8 fish. There are 4 starfish and 4 striped fish.



$$\begin{array}{r} \square \\ \square \end{array} = \square + \square$$
$$\begin{array}{r} \square \\ \square \end{array} + \square = \square$$

There are 2 sharks and 6 dolphins. There are 8 sea animals.



$$\begin{array}{r} \square \\ \square \end{array} = \square + \square$$
$$\begin{array}{r} \square \\ \square \end{array} + \square = \square$$